















Name: \_\_\_\_\_

Date: \_\_\_\_\_

## Geometry Shapes

Write the names of shapes.

 <input data-bbox="233 775 539 859" type="text"/>	 <input data-bbox="643 775 949 859" type="text"/>	 <input data-bbox="1054 775 1361 859" type="text"/>
 <input data-bbox="233 1174 560 1258" type="text"/>	 <input data-bbox="643 1174 949 1258" type="text"/>	 <input data-bbox="1054 1174 1361 1258" type="text"/>
 <input data-bbox="233 1576 539 1660" type="text"/>	 <input data-bbox="643 1576 949 1660" type="text"/>	 <input data-bbox="1054 1576 1361 1660" type="text"/>
 <input data-bbox="233 1977 539 2061" type="text"/>	 <input data-bbox="643 1977 949 2061" type="text"/>	 <input data-bbox="1054 1977 1361 2061" type="text"/>















Name: \_\_\_\_\_

Date: \_\_\_\_\_

# Geometry Shapes

## Answer Sheet

 <b>Square</b>	 <b>Triangle</b>	 <b>Star</b>
 <b>Semi Circle</b>	 <b>Ellipse</b>	 <b>Circle</b>
 <b>Cone</b>	 <b>Rhombus</b>	 <b>Rectangle</b>
 <b>Polygon</b>	 <b>Hexagon</b>	 <b>Trapezoid</b>